

D. Fractions and mixed numbers on the number line

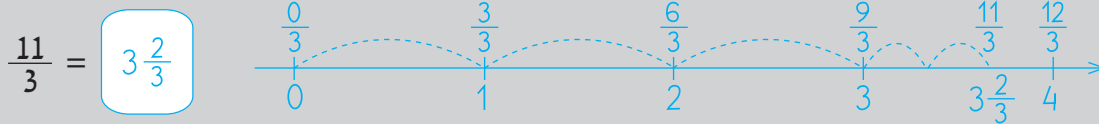
23. Finding a mixed number or a whole number that equals a given fraction

Mark each of the following fractions on the number line.

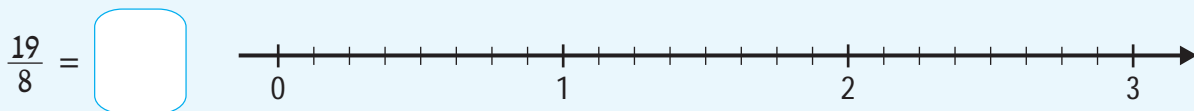
Walking like the giant, find a mixed number that equals each fraction.

Complete the equality as in the example.

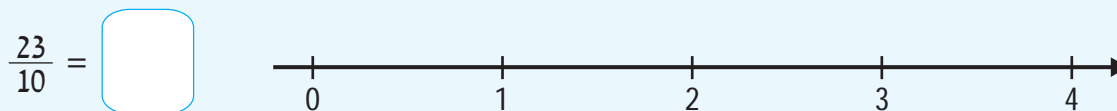
You can use the rulers to check your answers.



a|



b|



c|

$$\frac{29}{9} = \boxed{}$$

d|

$$\frac{500}{100} = \boxed{}$$