

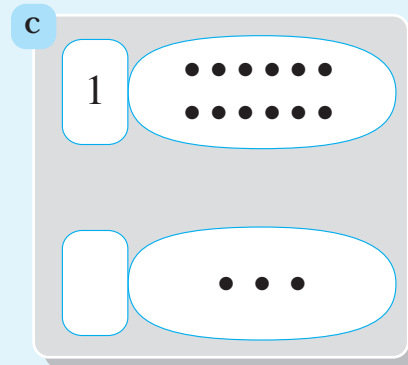
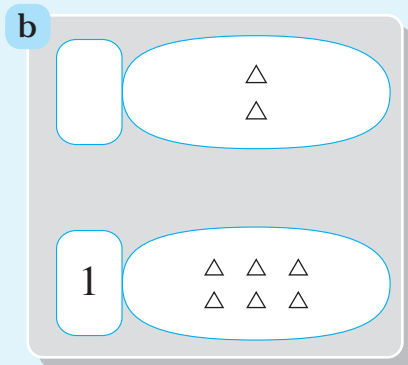
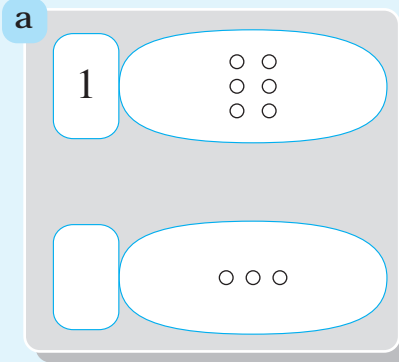
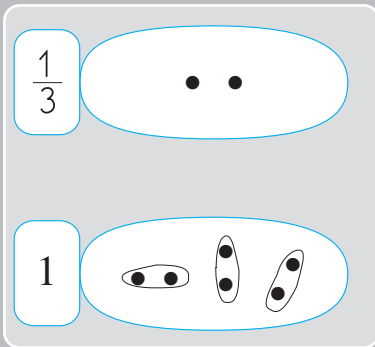
B. Teaching the operator interpretation of the fraction using sets of objects

12. Finding the missing fraction (the case of $\frac{1}{n}$)

Find and write the missing fraction in each of the following tables.

Use objects or drawings.

example



To the teacher:

All the problems in this section can be solved by dividing the unit into equal subsets where each subset corresponds to the given fraction.