







2. Comparing Groups







6 Which pair of groups does the story describe?

Mark next to the relevant pair of sets: Cross out the others.

a | Set A is 3 times smaller than set B.

<p>Set A</p>  <p>2</p>	<p>Set A</p>  <p>9</p>	<p>Set A</p>  <p>3</p>
<p>Set B</p>  <p>6</p>	<p>Set B</p>  <p>3</p>	<p>Set B</p>  <p>6</p>

b | The number of dots in set A is 2 times as many as the number of dots in set B.

<p>Set A</p>  <p>5</p>	<p>Set A</p>  <p>8</p>	<p>Set A</p>  <p>8</p>
<p>Set B</p>  <p>10</p>	<p>Set B</p>  <p>4</p>	<p>Set B</p>  <p>6</p>

3. Word Problems

7 Write the relevant numbers:



a | The number of boys in class C is times smaller than the number of girls. In class C there are boys and girls.

b | In Galit's box there are pencils.
The number of crayons in the box is times smaller than the pencils.
In Galit's box there are crayons.

8 Complete numbers, so that you get correct stories.



Use these numbers: 18 6 4 2 .

(Use each number just once.)

a | boys and girls were at Yaron's birthday.
There were 3 times as many boys as girls.

b | The number of plays that I saw last summer were twice less than the number of movies. I saw in the summer plays and movies.

9 A Riddle:



Ran's mother is twice as old as Ran.

Ran is 10 years older than his sister Maya. Maya is 10 years old.

How old is Ran's and Maya's mother? _____

